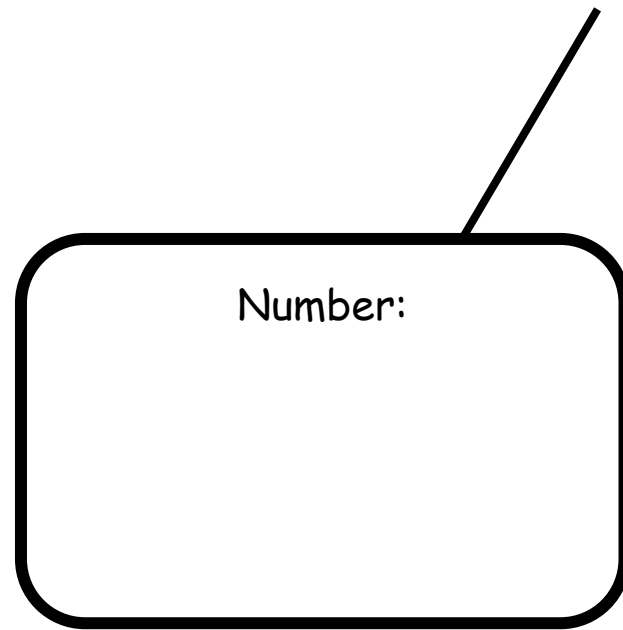


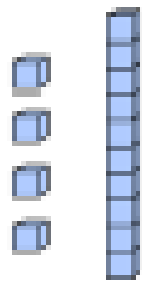
**Representing Numbers - Choose a number between 20-50 and show it in as many different ways as you can. Think about all the different equipment we use in school.**



Number:

# Representing numbers


The picture shows 41.



True or false?  
Explain how you know.

How else can you represent 41?

The number represented by the frames is  
1 more than the number \_\_\_\_\_.



The picture shows the  
number 25.



Is Che correct? Explain how you know.

How else could you represent 25?

Draw 2 different ways of showing:

2 tens and 4 ones

Draw 2 different ways of showing:

3 tens and 6 ones

2 tens and 3 tens and 7 ones = 67

True or false?  
Explain how you know.

Complete:

1 ten and \_\_\_\_\_ tens and 9 ones = 49

Spot the mistake. Explain how it can be corrected. Then complete the rest of the table.

Number	Tens and Ones	Ten Frames	Base 10	Words
34				thirty-four
	4 tens 3 ones			